



Rabbits




1 2 3 4 5 6 7 8 9 10 11 12 13 14 15 16 17 18 19 20 21 22 23 24 25 26 27 28 29 30
31 32 33 34 35 36 37 38 39 40 41 42 43 44 45 46 47 48 49 50
100 99 98 97 96 95 94 93 92 91 90 89 88 87 86 85 84 83 82 81
80 79 78 77 76 75 74 73 72 71 70 69 68 67 66 65 64 63 62 61 60 59 58 57 56 55 54 53 52 51

How many hutches? Sheet 1


Help the farmer work out how many hutches he needs to house his rabbits.




How many hutches?



How many hutches?




How many hutches?




How many hutches?

How many hutches? Sheet 2


Help the farmer work out how many hutches he needs to house his rabbits.



How many hutches?




How many hutches?




How many hutches?

How many hutches? Sheet 3


Help the farmer work out how many hutches he needs to house his rabbits.




How many hutches?




How many hutches?




How many hutches?



How many hutches?

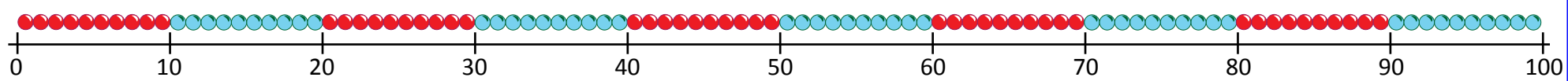


How many hutches?



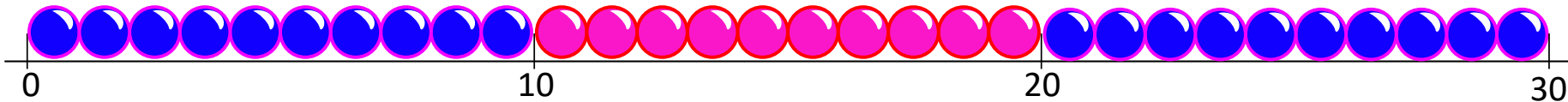
How many hutches?

0 - 100 beaded line



1 2 3 4 5 6 7 8 9 10 11 12 13 14 15 16 17 18 19 20 21 22 23 24 25 26 27 28 29 30
100 99 98 97 96 95 94 93 92 91 90 89 88 87 86 85 84 83 82 81
31 32 33 34 35 36 37 38 39 40 41 42 43 44 45 46 47 48 49 50
51 52 53 54 55 56 57 58 59 60 61 62 63 64 65 66 67 68 69 70 71 72 73 74 75 76 77 78 79 80

0-30 beaded line



Division question cards

How many groups of 10 are in 20?

How many groups of 5 are in 10?

How many groups of 2 are in 6?

How many groups of 2 are in 8?

How many groups of 10 are in 30?

How many groups of 5 are in 15?

How many groups of 5 are in 20?

How many groups of 10 are in 40?

How many groups of 5 are in 25?

Problem challenge cards



6 into groups
of 2

20 into
groups of 5

20 into
groups of 10

8 into groups
of 2

30 into
groups of 5

12 into
groups of 2

30 into
groups of 10

25 into
groups of 5

40 into
groups of 10

14 into
groups of 2

35 into
groups of 5

50 into
groups of 10