

# Show the number



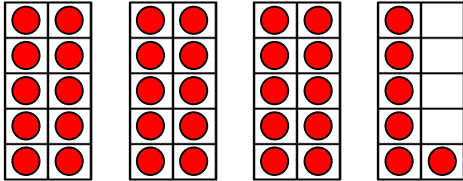
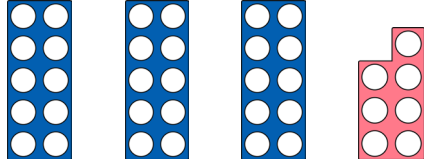
Complete the table to represent to show the numbers in different ways.

Number	Written form	Tens and Ones	Picture representation
53	fifty-three	_____ tens _____ ones	
	seventy-one	7 tens 1 one	
36		_____ tens _____ ones	
62	sixty-two	_____ tens _____ ones	
		3 tens 4 ones	

# Show the number



Complete the table to represent to show the numbers in different ways.

Number	Written form	Tens and Ones	Picture representation
53		_____ tens _____ ones	
	seventy-one	7 tens 1 one	
36		_____ tens _____ ones	
	sixty-two	_____ tens _____ ones	
		_____ tens _____ ones	

# Show the number

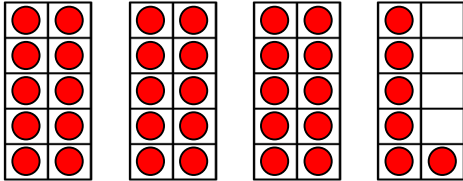


Complete the table to represent to show the numbers in different ways.

Number	Written form	Tens and Ones	Picture representation
53			
		7 tens 1 one	
	sixty-two		

# Answers - Show the number

Complete the table to represent to show the numbers in different ways.

Number	Written form	Tens and Ones	Picture representation
53	fifty-three	5 tens 3 ones	Any suitable representation.
71	seventy-one	7 tens 1 one	Any suitable representation.
36	thirty-six	3 tens 6 ones	
62	sixty-two	6 tens 2 ones	Any suitable representation.
37	thirty-four	3 tens 4 ones	