

# Select money



1 Circle the coins that would make the amount shown.

<p>a 11p</p>	<p>b 15p</p>	<p>c 20p</p>
<p>d 23p</p>	<p>e 28p</p>	<p>f 30p</p>
<p>g 32p</p>	<p>h 37p</p>	<p>i 46p</p>


2 Shade the box that **does not** show 10p.      Shade the box that **does not** show 20p.


# Select money




1 Draw money in each of the piggy banks to show the amounts.

a




7p

b




12p

c




22p

d




36p

e




£1 and 5p

f




£3 and 20p

g



£5 and 40p

h



£6 and 70p

# Select money



1 Circle the coins that would make the amount shown.

<p>a 15p</p>	<p>b 20p</p>	<p>c 23p</p>
<p>d 28p</p>	<p>e 30p</p>	<p>f 32p</p>
<p>g 37p</p>	<p>h 46p</p>	<p>i 54p</p>

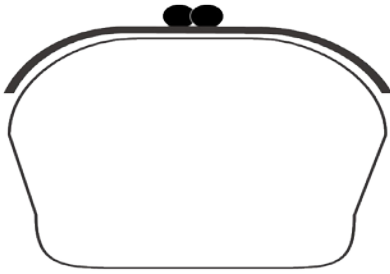
2 Shade the box that does not show 26p.      Shade the box that does not show 35p.


# Select money



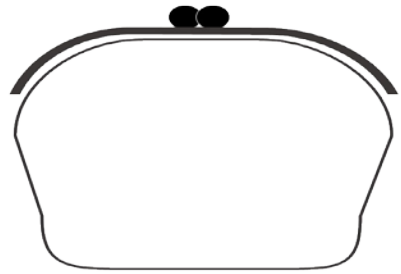
1 Draw money in each of the purses to show the amounts.

a



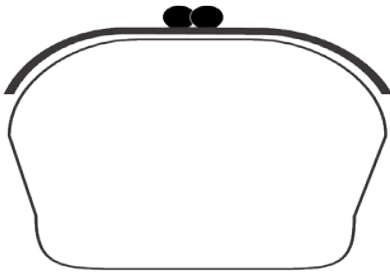
22p

b



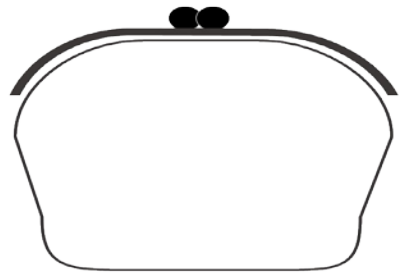
36p

c



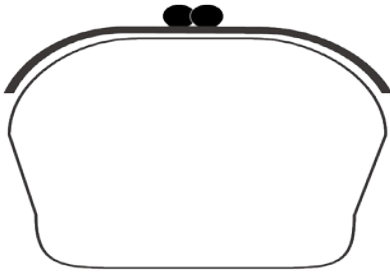
79p

d



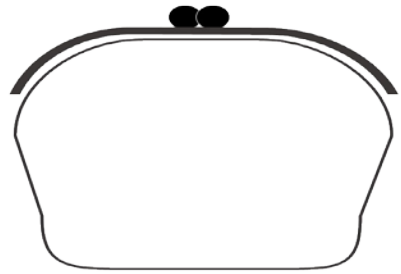
93p

e



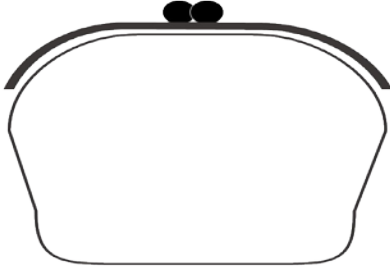
£3 and 20p

f



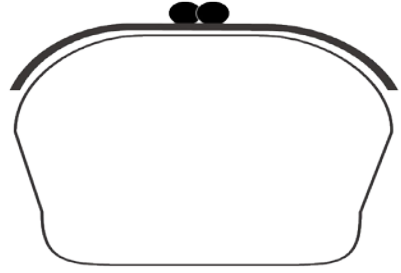
£5 and 70p

g



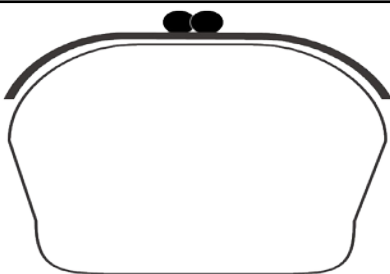
£6 and 42p

h



£10 and 90p

i



£13 and 7p

j

Are the amounts you have drawn made using the least amount of notes and coins?

---

---

# Select money



1 Circle the coins that would make the amount shown.

<p>a 23p</p>	<p>b 28p</p>	<p>c 32p</p>
<p>d 37p</p>	<p>e 46p</p>	<p>f 49p</p>
<p>g 51p</p>	<p>h 54p</p>	<p>i 56p</p>

2 Shade the box that does not show 51p.

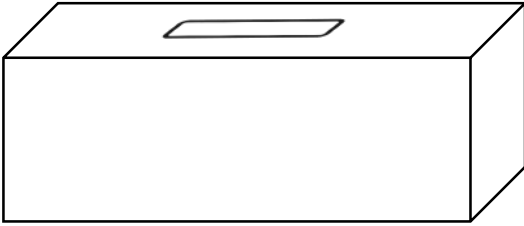
Shade the box that does not show 65p.


# Select money



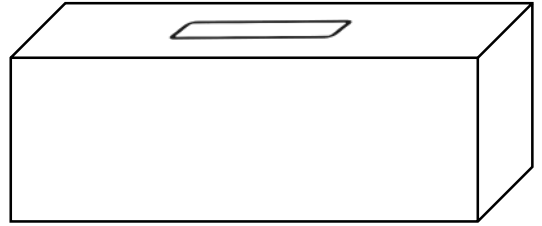
1 Draw money in each of the boxes to show the amounts.

a



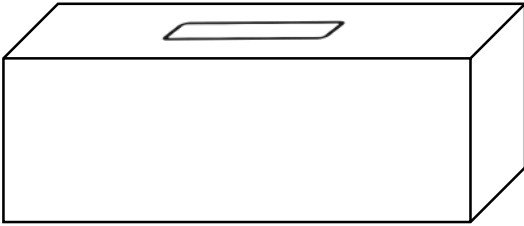
79p

b



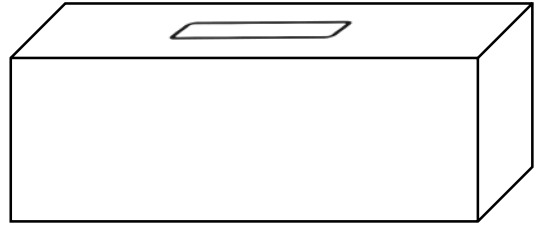
93p

c



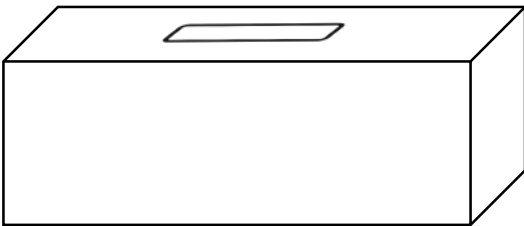
£6 and 42p

d



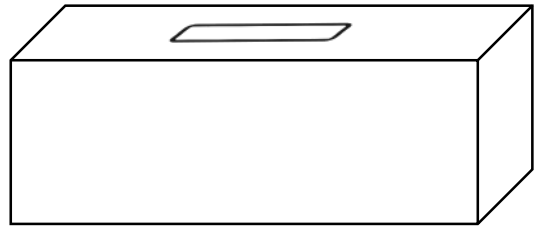
£12 and 95p

e



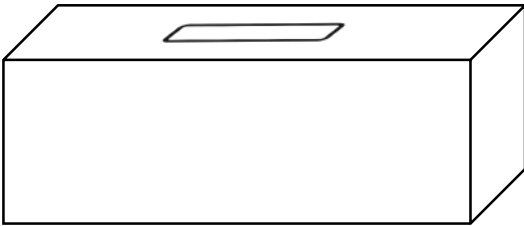
£13 and 7p

f



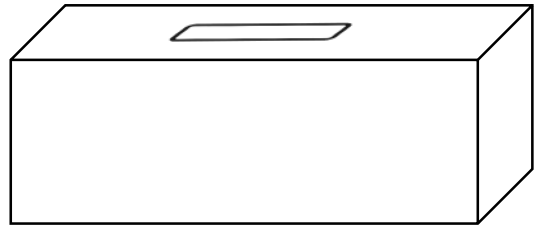
£17 and 31p

g



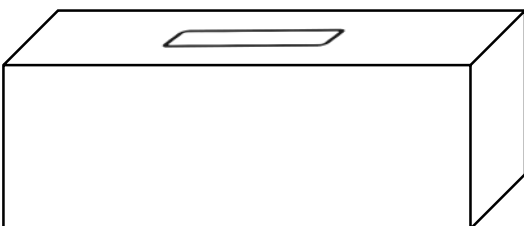
£18 and 3p

h



£27 and 81p

i



£35 and 16p

j

Are the amounts you have drawn made using the least amount of notes and coins?

---

---