

# Count money: Notes and coins



1 Count the money and write the amount shown.

a



= £ \_\_\_\_\_ and \_\_\_\_\_ p

b



= £ \_\_\_\_\_ and \_\_\_\_\_ p

c



= £ \_\_\_\_\_ and \_\_\_\_\_ p

d



= £ \_\_\_\_\_ and \_\_\_\_\_ p

e



= £ \_\_\_\_\_ and \_\_\_\_\_ p

f

£ \_\_\_\_\_ and \_\_\_\_\_ p =



g

£ \_\_\_\_\_ and \_\_\_\_\_ p =



h

£ \_\_\_\_\_ and \_\_\_\_\_ p =



i

£ \_\_\_\_\_ and \_\_\_\_\_ p =



j

£ \_\_\_\_\_ and \_\_\_\_\_ p =

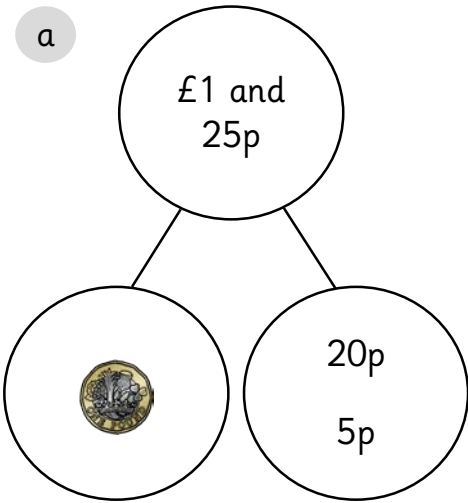


# Count money: Notes and coins

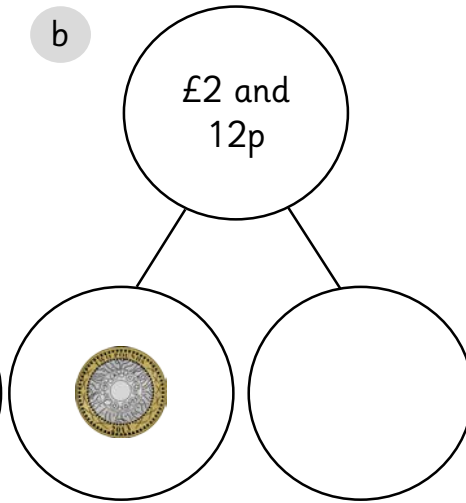


1 Complete the part-whole models. The first one has been completed for you.

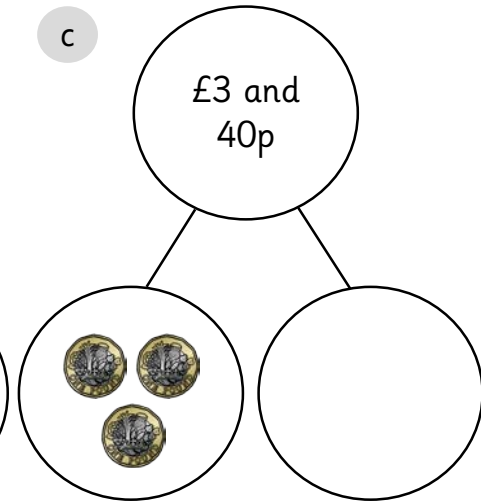
a



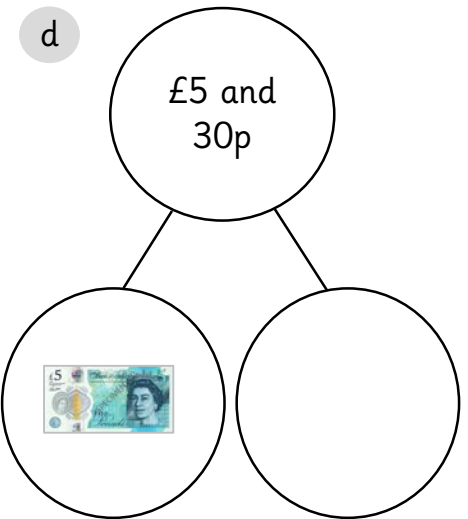
b



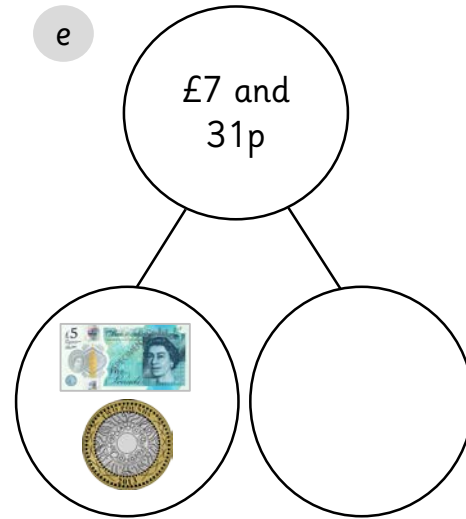
c



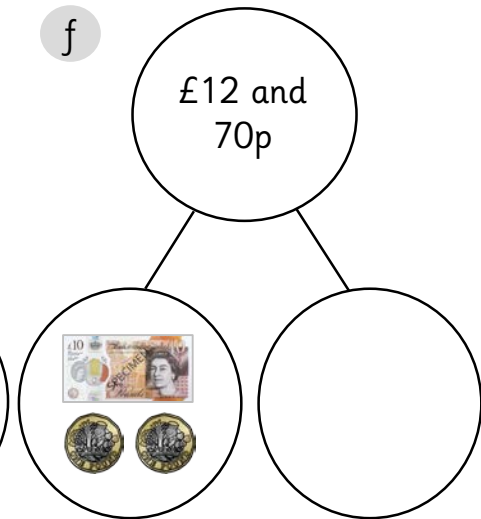
d



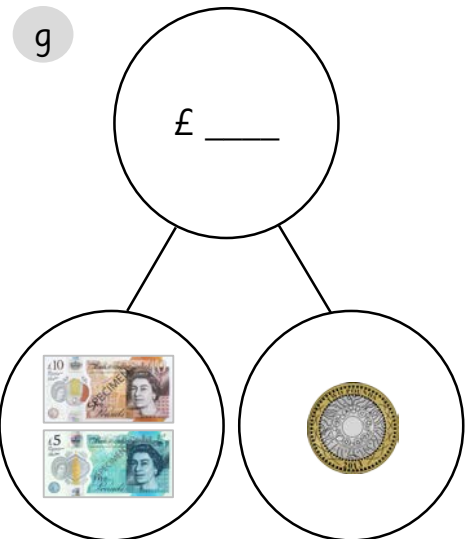
e



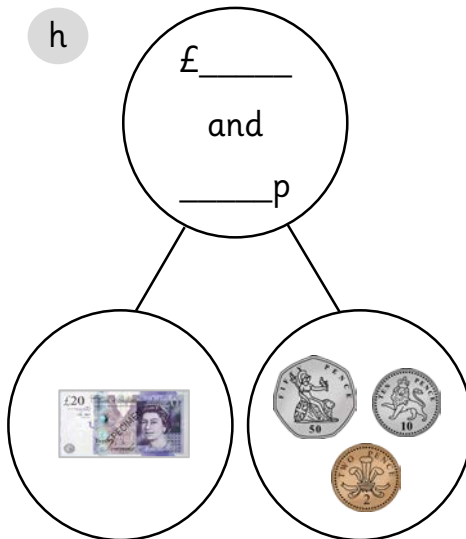
f



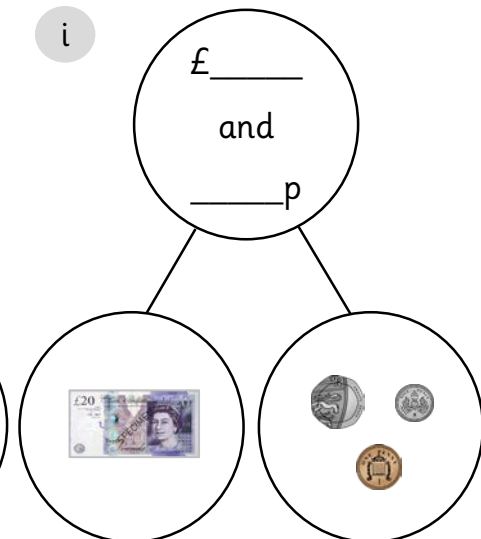
g



h



i



# Count money: Notes and coins



1 Fill in the gaps to make the statements correct.

a  $£10 + £5 + 20p + 20p + 10p = £\underline{\hspace{2cm}} \text{ and } \underline{\hspace{2cm}}p$

b  $£20 + £10 + £5 + 50p + 20p = £\underline{\hspace{2cm}} \text{ and } \underline{\hspace{2cm}}p$

c  $£20 + £5 + £2 + 20p + 5p = £\underline{\hspace{2cm}} \text{ and } \underline{\hspace{2cm}}p$

d  $£20 + £10 + 50p + 20p + 5p = £\underline{\hspace{2cm}} \text{ and } \underline{\hspace{2cm}}p$

e  $£10 + £2 + £1 + 10p + 10p = £\underline{\hspace{2cm}} \text{ and } \underline{\hspace{2cm}}p$

2 Mo has written in the missing answer. Is Mo correct?

Circle either:                      YES                      NO

$£5 + £\underline{2} + 50p + 5p + 1p = £10 \text{ and } 56p$


Explain how you know.

---

---

3 Gina needs £2 and 28p.

Draw the other coin that Gina will need to make £2 and 28p.



# Count money: Notes and coins



1 Count the money and write the amount shown.

a  = £ \_\_\_\_\_ and \_\_\_\_\_ p

b  = £ \_\_\_\_\_ and \_\_\_\_\_ p

c  = £ \_\_\_\_\_ and \_\_\_\_\_ p

d  = £ \_\_\_\_\_ and \_\_\_\_\_ p

e  = £ \_\_\_\_\_ and \_\_\_\_\_ p

f £ \_\_\_\_\_ and \_\_\_\_\_ p = 

g £ \_\_\_\_\_ and \_\_\_\_\_ p = 

h £ \_\_\_\_\_ and \_\_\_\_\_ p = 

i £ \_\_\_\_\_ and \_\_\_\_\_ p = 

j £ \_\_\_\_\_ and \_\_\_\_\_ p = 

# Count money: Notes and coins



1 Complete the part-whole models.

a

£1 and  
25p



b

£2 and  
12p



c

£3 and  
40p



d

£5 and  
30p



e

£7 and  
75p



f

£12 and  
91p



g



h



i



# Count money: Notes and coins



1 Fill in the gaps to make the statements correct.

a  $£10 + £5 + 20p + 20p + 10p = £$  \_\_\_\_\_ and \_\_\_\_\_ p

b  $£$  \_\_\_\_\_ and \_\_\_\_\_ p =  $£20 + £10 + £5 + 50p + 20p$

c  $£20 + £5 + £2 + 20p + 5p = £$  \_\_\_\_\_ and \_\_\_\_\_ p

d  $£$  \_\_\_\_\_ and \_\_\_\_\_ p =  $£20 + £10 + £5 + £5 + 20p + 20p + 2p$

e  $£20 + £1 + £5 + 10p + 50p + 2p + 1p + 5p = £$  \_\_\_\_\_ and \_\_\_\_\_ p

2 Mo has written in the missing parts. Is Mo correct?

Circle either:                      YES                      NO

$£5 + £$  5  $+ 50p + 5p + 2p = £10$  and 56 p

Explain how you know.

---

---

3 Look at the coins and notes below.

Sue says that there is 10p.  
Mo says that there is £10.  
Are either of them correct?



Explain how you know.

---

---

---

---

# Count money: Notes and coins



1 Count the money and write the amount shown.

a = £ \_\_\_\_\_ and \_\_\_\_\_ p



b £ \_\_\_\_\_ and \_\_\_\_\_ p =



c = £ \_\_\_\_\_ and \_\_\_\_\_ p



d = £ \_\_\_\_\_ and \_\_\_\_\_ p



e £ \_\_\_\_\_ and \_\_\_\_\_ p =



f = £ \_\_\_\_\_ and \_\_\_\_\_ p



g £ \_\_\_\_\_ and \_\_\_\_\_ p =



h £ \_\_\_\_\_ and \_\_\_\_\_ p =



i = £ \_\_\_\_\_ and \_\_\_\_\_ p



j £ \_\_\_\_\_ and \_\_\_\_\_ p =



# Count money: Notes and coins



1 Complete the part-whole models.

a

£1 and  
25p

b

£2 and  
12p


c

£6 and  
30p

d

e

f



£22 and  
45p

g

h

i



£30 and  
58p



# Count money: Notes and coins



1 Fill in the gaps to make the statements correct.

a  $£\underline{\hspace{2cm}} + £5 + 20p + 20p + 10p = £15$  and  $\underline{\hspace{2cm}}$ p

b  $£\underline{\hspace{2cm}} + £5 + \underline{\hspace{2cm}}$ p + 20p + 10p = £25 and 80p

c  $£10 + £5 + £\underline{\hspace{2cm}} + £1 + 10p + 10p + 10p + 5p = £18$  and  $\underline{\hspace{2cm}}$ p

d  $£10 + £5 + £20 + £10 + 20p + \underline{\hspace{2cm}}$ p + 5p = £ $\underline{\hspace{2cm}}$  and 75p

2 Look at the coins and notes below.

Sue says that there is 20p.

Mo says that there is £20.

Are either of them correct?



Explain how you know.

---

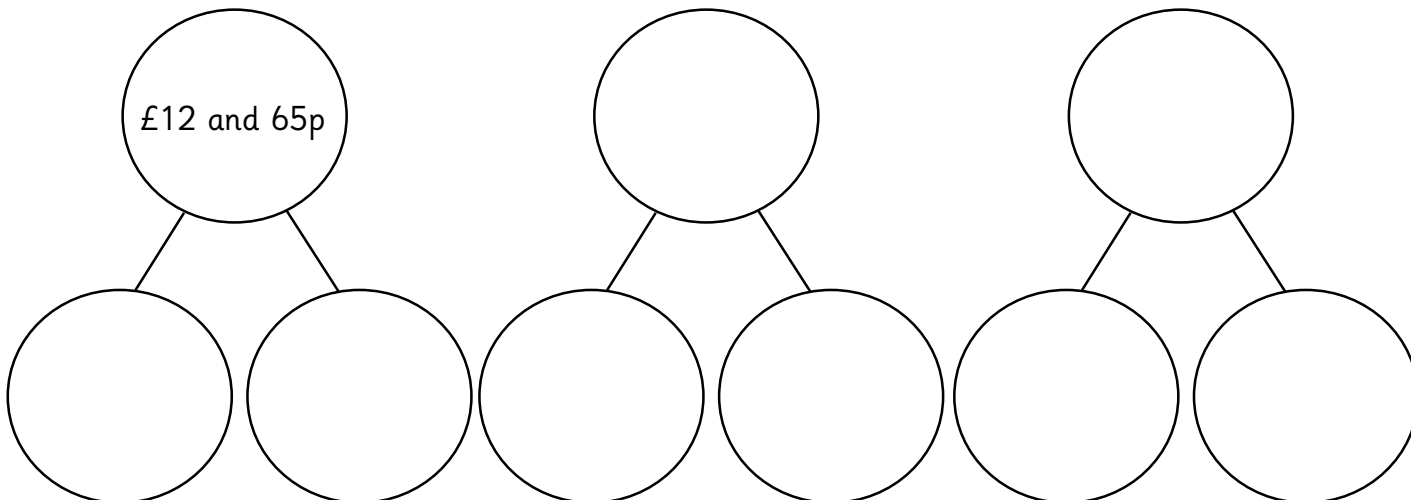
---

---

---

3 Complete the part-whole models to show three different ways of making £12 and 65p.

£12 and 65p



Can you think of any more ways?