

Count money: Pounds



1 Count the money and write the amount shown.



= £ _____



= £ _____



= £ _____



= £ _____



= £ _____



= £ _____

2 Match the money to the correct total.



£25

£20



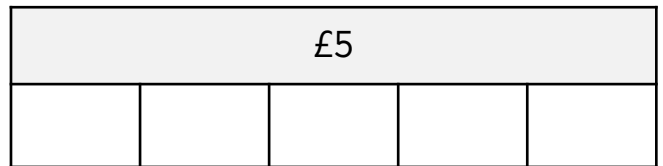
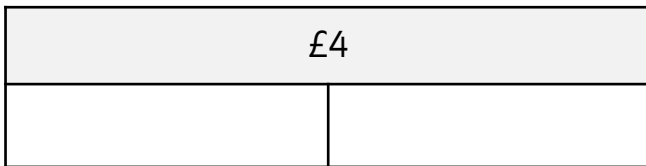




£10

£40

Count money: Pounds




- 1 Complete the bar models below by writing the correct amounts.
Each part must have same value.



- 2 Asha says,



I have correctly completed the bar model.



True

False

Explain how you know.

Count money: Pounds



1 Count the money and write the amount shown.

a



= £ _____

b

£ _____ =



c



= £ _____

d

£ _____ =



e



= £ _____

f

£ _____ =



2 Match the money to the correct total.



£25

£40



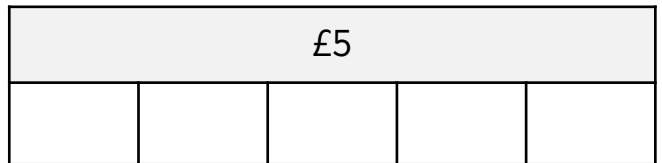
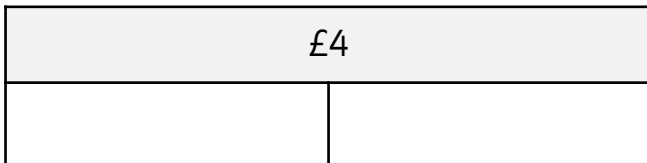

£10

£60

Count money: Pounds



- 1 Complete the bar models below by either writing or drawing the correct amounts. Each part must have same value.



- 2 Rob says,



There is £8 in the purse.



True

False

Explain how you know.

Count money: Pounds



1 Count the money and write the amount shown.

a



= £ _____

b

£ _____ =



c



= £ _____

d

£ _____ =



e



= £ _____

f

£ _____ =



2 Match the money to the correct total.
Find the missing totals and complete the boxes.





£30

£15

Count money: Pounds



- 1 Complete the bar models below by either writing or drawing the correct amounts. Each part must have same value.



- 2 Sue says,



There is £44 in the money bag.



True

False

Explain your answer.

- 3 Circle the mistake in the money sequence.

£10 £12 £14 £15 £18

a Explain the mistake. _____

b Write the correct money sequence. _____