

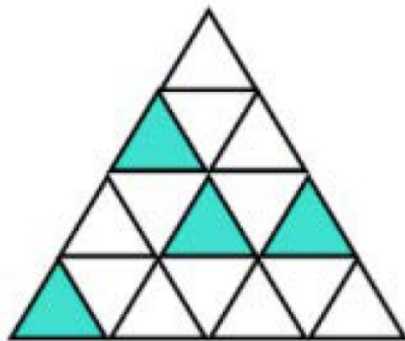
17.1.22

Choose two numbers to complete this calculation

$$\square + \square = 72$$

19 22 51 33 53

What fraction of the shape is shaded?



Count in 25s

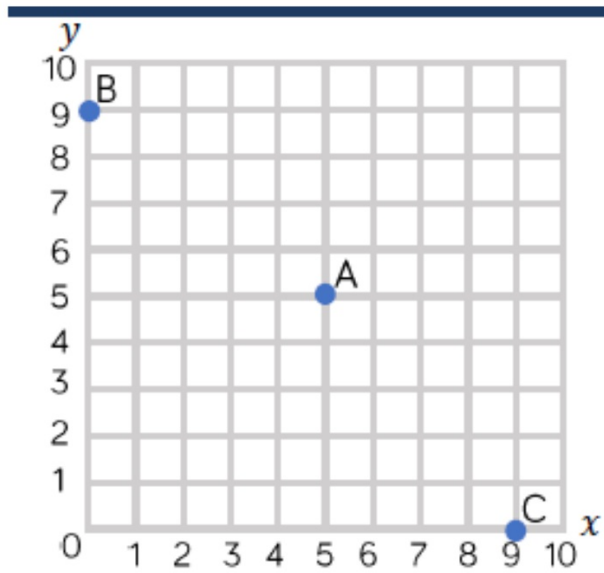
Forward from 0

Backwards from 500

Forward from 2,375

Backwards from 4,500

What are the coordinates?



A =

B =

C =

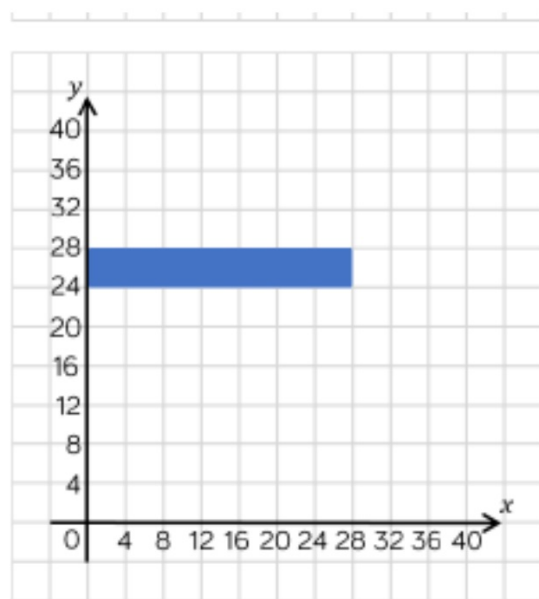
What are the coordinates of the vertices of the rectangle?

(,)

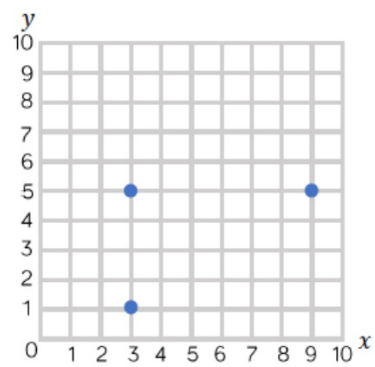
(,)

(,)

(,)



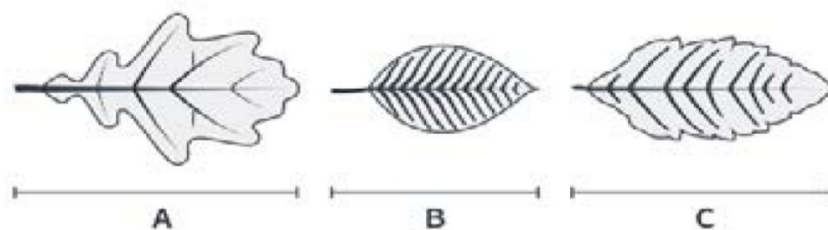
Tommy is drawing a rectangle on a grid.
Plot the final vertex of the rectangle.
Write the coordinate of the final
vertex.



18.1.22

Write the number **three million, twenty five thousand and seventeen** in figures.

Here are three leaves.



Write $<$, $>$ or $=$ to compare the lengths of the leaves.

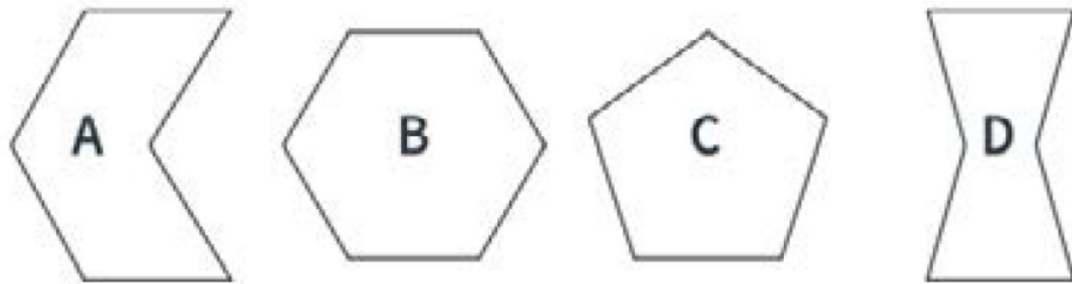
Length A

Length B

Length B

Length C

19.1.22



Which of these 2D shapes is not a hexagon?

What is the value of the digit 7 in this number?
370,423

Count in 250s

Forward from 0

Backwards from 5,000

Forward from 1,500

Backwards from 7,000

$$997 + 10 =$$

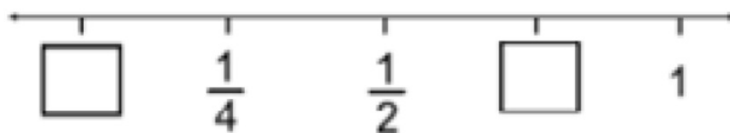
$$768 \times 5 =$$

		6	2	
	x	2	5	
		<hr/>		

$$2,407,562 - 10,000 =$$

20.1.22

Write the missing numbers on the **number line**



Fill in the missing number

$$63 + 28 = 100 - \square$$

Count in 800s

Forwards from 0

Backwards from 480

Forwards from 3,000

Backwards from 10,000

$$2.56 \times 7 =$$

$$\frac{6}{7} \div 4 =$$

$$726 \div 6 =$$

$$\frac{3}{7} \times 175 =$$

21.1.21

Fred has $\frac{1}{3}$ of a chocolate bar left.
 He shares it between him and his 3 friends.
 How much chocolate will each person get?

$$\frac{1}{4} \div \square = \frac{1}{24}$$



$$\frac{1}{3}$$



$$\frac{1}{12}$$



$$\frac{1}{9}$$



None
of the
above



6



$$\frac{1}{6}$$



24

Emma and her 4 friends have $\frac{3}{4}$ of a pizza left. If they share it
 equally, what fraction will each person get?

There is $\frac{1}{3}$ of a chocolate bar left. This was shared between
 people. What fraction did they each get?



$$\frac{3}{16}$$



$$\frac{3}{20}$$



$$\frac{12}{16}$$



$$\frac{12}{20}$$



Count in 25s forwards from 675.

Count backwards in 25s from 11,050.

Count forward in 250s from 250.

Count backwards in 250s from 155,000

$$582 \div 100 =$$

$$3.67 \times 9 =$$

$$39 + 621 =$$

$$90 \times 40 =$$

