

Week beginning 05.10.20

**This work is to be completed by the children who are unable to currently attend school in Year 5 and is not expected to be part of the Year 5 weekly homework.**

### English

This week in English we are continuing our work on myths and taking particular interest in Bron. Having just received an amulet from Beogard, you are to imagine Bron is asleep dreaming of his future as a famous Saxon warrior. After waking up, can you describe the town that Bron is in and how he is seen as a great man. Then you will need to introduce a monster who is going to cause a problem such as stealing some of the townsfolk or damaging buildings and crops. This evil creature will then need to be defeated by Bron, sequence your ideas into a story to show how this happens.

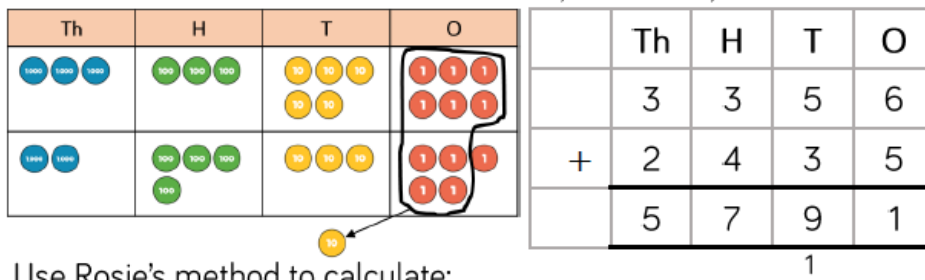
### SPaG

Investigate the different uses for apostrophes and what the rules are. After you have looked into this, write some sentences that use the different types of apostrophes. Your sentences can be based on what we have read so far in our book Freedom For Bron, for example Bron's shield or he couldn't find his armour.

### Maths

This week in maths, we are learning to add four digit or larger numbers. Please complete the tasks we have added below.

Rosie uses counters to find the total of 3,356 and 2,435






Use Rosie's method to calculate:

3,356 + 2,437      3,356 + 2,473      3,356 + 2,743

Dexter buys a laptop costing £1,265 and a mobile phone costing £492

How much do the laptop and the mobile phone cost altogether?

Complete the bar models.



3

What is the missing 4-digit number?

	Th	H	T	O
	—	—	—	—
+	6	3	9	5
	8	9	4	9

Complete:

	Th	H	T	O
	6	?	?	8
+	?	?	8	?
	9	3	2	5

Mo says that there is more than one possible answer for the missing numbers in the hundreds column.

Is he correct?

Explain your answer.









Use counters and a place value grid to calculate:

	5	9	3	4
+	2	2	4	6
<hr/>				

	3	2	7	5
+	6	1	5	6
<hr/>				

	1	7	7	2
+	2	2	5	0
<hr/>				

Find the total of 4,844 and 2,156

Th	H	T	O
			
			









	4	8	4	4
+	2	1	5	6
<hr/>				

Use  $<$ ,  $>$  or  $=$  to make the statements correct.

- |                 |                       |                 |
|-----------------|-----------------------|-----------------|
| $3,456 + 789$   | <input type="radio"/> | $1,810 + 2,436$ |
| $2,829 + 1,901$ | <input type="radio"/> | $2,312 + 2,418$ |
| $7,542 + 1,858$ | <input type="radio"/> | $902 + 8,496$   |
| $1,818 + 1,999$ | <input type="radio"/> | $3,110 + 707$   |

5

Ron uses place value counters to calculate  $4,356 + 2,435$

Th	H	T	O
			
			

	Th	H	T	O
	4	3	5	6
+	2	4	3	5
<hr/>				
	6	7	9	1

Use Ron's method to calculate:

	3	2	4	6	1
+		4	3	5	2
<hr/>					

	4	8	2	7	6
+		5	6	1	3
<hr/>					

Jack, Rosie and Eva are playing a computer game. Jack has 3,452 points, Rosie has 4,039 points and Eva has 10,989 points.

- How many points do Jack and Rosie have altogether?
- How many points do Rosie and Eva have altogether?
- How many points do Jack and Eva have altogether?
- How many points do Jack, Rosie and Eva have altogether?

## Science

As part of our science topic this term, we need to investigate the effect alcohol has on the human body. Use the PowerPoint about the effects of alcohol on the body and then have a go at the attached worksheet.

## History

This week we are looking into the different jobs that villagers had during Anglo-Saxon times and how they all pitched in to work as a team. Use the provided interactive link to look at the different roles people played in the running of the town.

## RE

Watch the video about Rama and Sita and see how the story shows the good and bad aspects of the different characters. Fold a piece of paper in half and label them as the good side (Rama and Sita) and the bad side (Ravana). Can you show these good and bad aspects using coloured drawings with captions/labels?

<https://www.youtube.com/watch?v=uRpNNF4fB4g>

## PE

Continue to practice your throwing skills by aiming a ball/beanbag at a target e.g. a bucket/cone/skittle. How far away can you go from the target whilst remaining accurate?

s